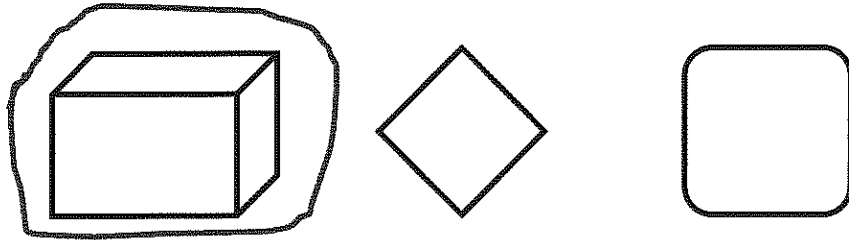



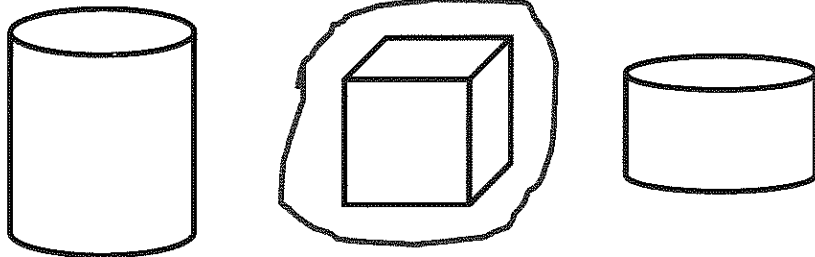
GK-M2-Lesson 9

In each row, circle the one that doesn't belong. Explain your choice to a grown-up.

The solid shape doesn't belong in this group. The other shapes are flat.



The cube doesn't belong. The other shapes are cylinders.



This piece of a circle doesn't belong. The other shapes really are circles.