


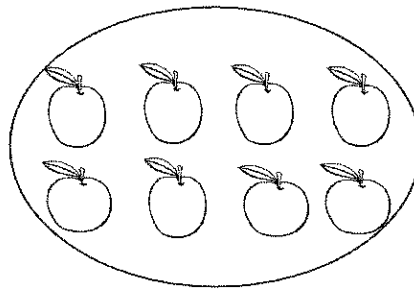
GK-M1-Lesson 37

Note: Be sure to ask your child about his/her mystery number from today's Number Fair!

Count how many are in each group. Write the number in the box. Circle the smaller group.



9




8

I see rows of bananas and apples. I can count 8 apples. I know that 8 is smaller than 9.

I can say 9. 1 less is 8.

Or I can say 8. 1 more is 9.

Draw some flowers.



How many?

7

I can draw 7 flowers in 5 groups. I can count them: fiiiive, six, seven. I know how to write the number 7.