





## GK-M1-Lesson 34

Count and color the triangles. Draw a group of triangles that is 1 less. Write how many you drew.

 	 
--	---

I remember the 1 more pattern when we counted from 1 to 10. This is just the opposite! Now, I can count down from 10 to 1, and each number is 1 less!

Look, one triangle has disappeared! 9. 1 less is 8. If I make another triangle disappear, I can say, 8. 1 less is 7.