


GK-M1-Lesson 26

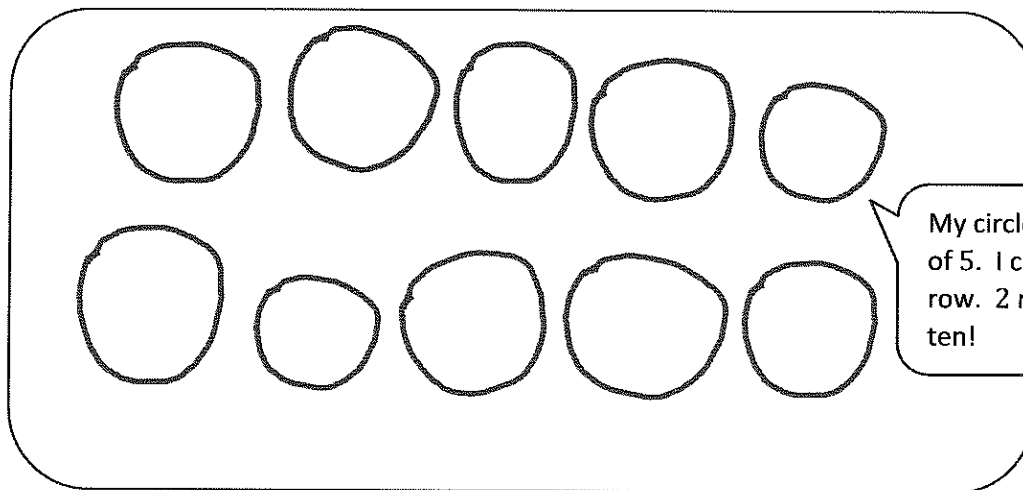
Draw 5 circles in a row. Draw another 5 circles in a row under them.

How many circles did you draw?




I can write ten!

Write the number in the box.



My circles are in groups of 5. I count 5 in each row. 2 rows of 5 make ten!

Write how many in the box.



These triangles are not arranged in a line. But, I can count them all without counting twice. I've got a strategy!

