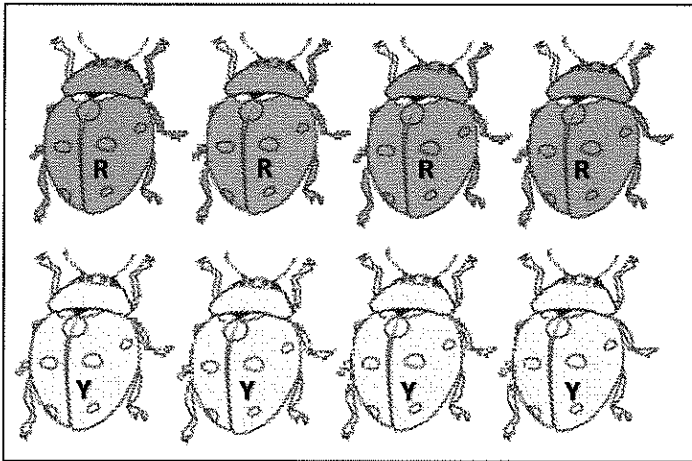


GK-M1-Lesson 21

Color 4 ladybugs red. Color 4 ladybugs yellow.

Count and circle how many.



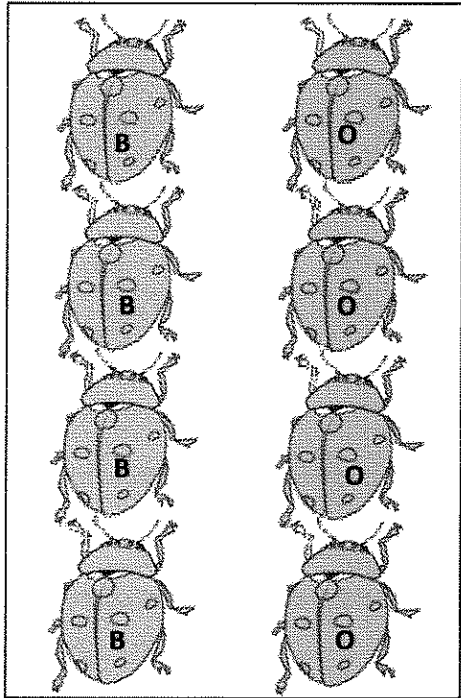
These two rows have the same number of ladybugs. I can see 4 and 4 hiding in 8.

6    7    8

Color 4 ladybugs blue. Color 4 ladybugs orange.


Count and circle how many.

It doesn't matter whether the ladybugs are arranged in rows or columns; there are still 8 ladybugs in all!



6    7    8

Count how many. Write the number in the box.



I see 5 and 2 hiding in 7.