

G2-M4-Lesson 6

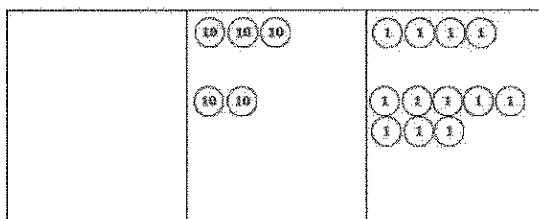
1. Solve the following problems using your place value chart and place value disks. Compose a ten, if needed. Think about which ones you can solve mentally, too!

$34 + 25 = \underline{59}$

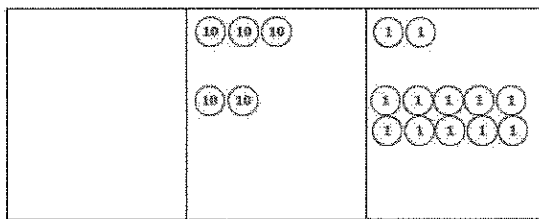
I can solve this one mentally! I just add like units. 3 tens and 2 tens is 5 tens. 4 ones and 5 ones is 9 ones. Altogether that makes 5 tens 9 ones, or 59.

$34 + 28 = \underline{62}$

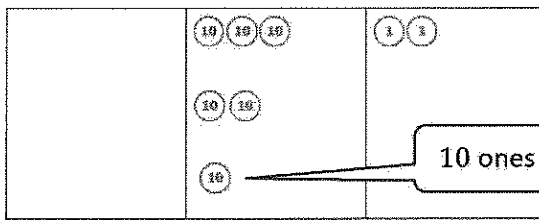
I can use my chart and place value disks to solve this problem.



I made a ten!



So, $34 + 28 = 62$.



10 ones is 1 ten!

2. Solve using a place value chart.

Marty used 28 toothpicks for his art project, and 37 were left in the box. How many toothpicks were there in all?

I have more than 10 ones. I can compose a ten!

I made a ten!

10 ones is 1 ten!

$$28 + 37 = 65$$

There were 65 toothpicks in all.