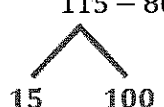
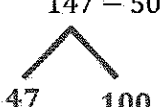
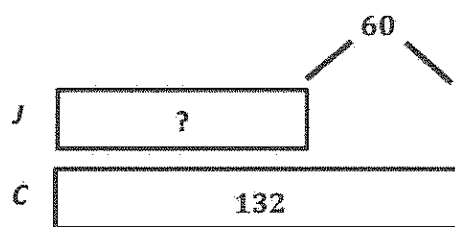


G2-M4-Lesson 23

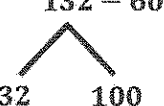
1. Solve using number bonds to subtract from 100.

$115 - 80 = \underline{35}$  <p>I can make a number bond to break apart 115. I can take out the 100 from 115. Then, 15 are left.</p> $100 - 80 = 20$ $20 + 15 = 35$	$147 - 50 = \underline{97}$  <p>After I take out 100, I can subtract 50 easily. $100 - 50 = 50$. I can look at my number bond and add back the rest, so $50 + 47 = 97$.</p> $100 - 50 = 50$ $50 + 47 = 97$
--	--

2. Jana sold 60 fewer candles than Charlotte. Charlotte sold 132 candles. How many candles did Jana sell? Solve using a number bond.



My tape diagram shows that I don't know how many candles Jana sold, but I know that Charlotte sold 60 more candles than Jana.

$$132 - 60 = 72$$


I can break apart 132 so I can subtract from the hundred. This is a good strategy since it's easy to solve $100 - 60 = 40$. Then, I can add back the other part, so $40 + 32 = 72$.

$$100 - 60 = 40$$

$$40 + 32 = 72$$

Jana sold 72 candles.