

G2-M3-Lesson 1

1. Fill in the missing part.

a. 3 ones + 7 ones = 10 ones

b. 3 + 7 = 10

c. 3 tens + 7 tens = 1 hundred

d. 30 + 70 = 100

I know 3 facts that can help me solve all these problems:

$$3 + 7 = 10$$

$$10 \text{ ones} = 1 \text{ ten}$$

$$10 \text{ tens} = 1 \text{ hundred}$$

2. Rewrite in order from largest to smallest units.

4 tens

Largest 2 hundreds

2 hundreds

4 tens


9 ones

Smallest 9 ones

I know that 2 hundreds equal 200, 4 tens equal 40, and 9 ones equal 9.


3. Count each group. What is the total number of sticks in each group?

Bundles of 100




200

Bundles of 10



30

Ones




6

What is the total number of sticks? 236

4. Draw and solve.

Moses has 100 stickers. Jared has 80 stickers. Jared wants to have the same number of stickers as Moses. How many more stickers does Jared need?



I can start at 80 and count on by 10's until I reach 100.

Jared needs 20 more stickers

I can draw bundles of 10 to help me keep count: 90, 100.

I counted 2 more tens. That's 20.