

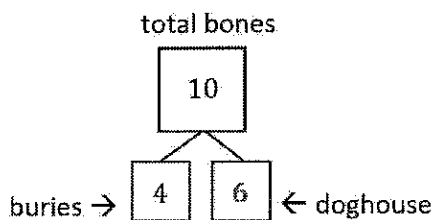


G1-M1-Lesson 8

1. Rex found 10 bones on his walk. He can't decide which part he wants to bring to his doghouse and which part he should bury. Help show Rex his choices by filling in the missing part of the number bonds.



My 10 fingers can represent the 10 bones.



If Rex buries 4 bones, he'll put 6 in his doghouse.

2. Write all the adding sentences that match this number bond.

$$\boxed{4} \oplus \boxed{6} = \boxed{10}$$

$$\boxed{10} = \boxed{4} \oplus \boxed{6}$$

$$\boxed{6} \oplus \boxed{4} = \boxed{10}$$

$$\boxed{10} = \boxed{6} \oplus \boxed{4}$$

In addition to tonight's Homework, students may wish to create flashcards that will help them build fluency with all the ways to make 10 (10 and 0, 9 and 1, 8 and 2, 7 and 3, 6 and 4, 5 and 5).