


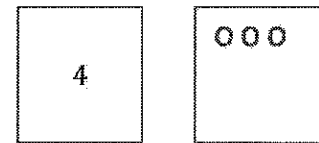
G1-M1-Lesson 10

1. a. Use your 5-group cards to solve.



I see 4 little tortoises and 3 big tortoises.

b. Draw the other 5-group card to show what you did.




My 5-group cards can help me add. I just start at 4 and *count on* 3 more. Fooooour..., 5, 6, 7.

$$\boxed{4} + \boxed{3} = \boxed{7}$$

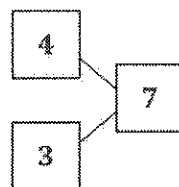
My number sentence shows that 4 little tortoises plus 3 big tortoises equals 7 total tortoises.

2. Kira has 3 cats and 4 dogs. Draw a picture to show how many pets she has.



My math picture can be just circles!

$$\boxed{3} + \boxed{4} = \boxed{7}$$



In my number bond, the parts are 4 and 3. The total is 7.

My number sentence shows that 3 cats plus 4 dogs equals 7 pets!

Kira has 7 pets.