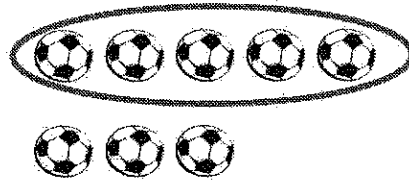


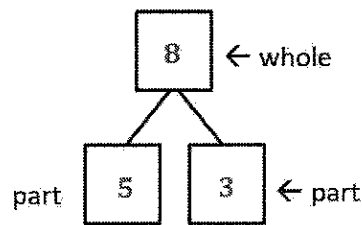
### G1-M1-Lesson 1

1. Circle 5. Then, make a number bond.



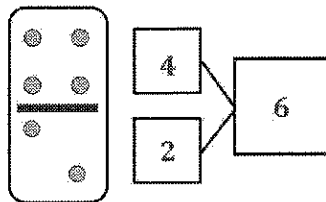
I circled 5 balls, and there are 3 more.  
I can count on from 5 to find the total.  
Fiiiive, 6, 7, 8.

Number Bond



I can make a number bond for the soccer balls.  
5 and 3 are the parts.  
The whole, or total, is 8.

2. Make a number bond for the domino.



I see 4 dots and 2 dots, so 4 and 2 are the parts.  
There are a total of 6 dots.