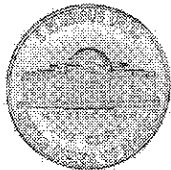


G1-M6-Lesson 23






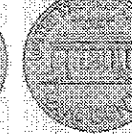
1. Add pennies to show the written amount.

A nickel is worth 5 cents. I can count on from 5. Fiiiiive, 6, 7. I counted on 2 more, so I draw 2 pennies.

7 cents		1	1
---------	---	---	---

2. Write the value of the group of coins.

- 10 ...
- 20 ...
- 30 ...
- 31 ...
- 32 ...
- 33

					
---	---	---	---	---	--

33 cents