


G1-M6-Lesson 22

1. Match the label to the correct coins, and write the value. There may be more than one match for each coin name.

a. quarter
25 cents

b. nickel
5 cents

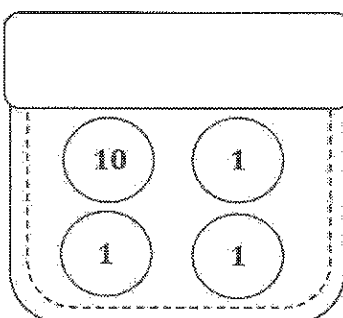


This is the heads side of a nickel.

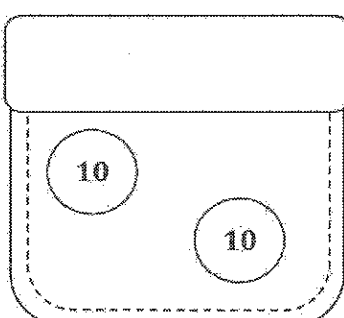
The quarter is a little bigger than the nickel.

2. Brian has 4 coins in his pocket, and Larry has 2 coins. Larry has more money than Brian. Draw a picture to show the coins each boy might have.

Brian's Pocket



Larry's Pocket



Hmmm ..., Brian has more coins, but Larry has more money. How is this possible?

I have an idea! Maybe Brian has 1 dime and 3 pennies. That's 13 cents. Larry might have 2 dimes, which is 20 cents. 20 is greater than 13, so Larry has more money!