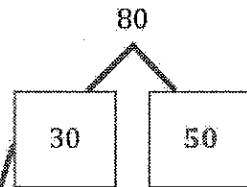
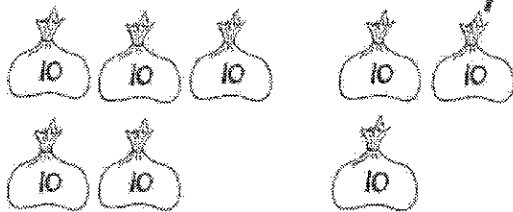
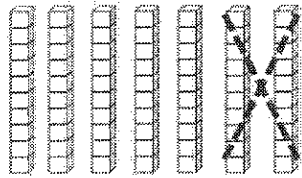


### G1-M6-Lesson 10

1. Complete the number bond or number sentence, and draw a line to the matching picture.



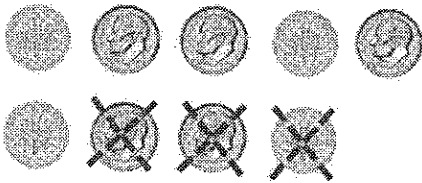
The number bond shows that 80 is the total, and 30 is one part.  $3 \text{ tens} + 5 \text{ tens} = 8 \text{ tens}$ . It's like  $3 + 5 = 8$ . The numbers stay the same, but the units change!

$$70 - \underline{20} = 50$$

70 is the total, and 50 is one part. 7 tens minus the mystery number equals 5 tens. The mystery number is 2 tens!

$$\underline{80} - 10 = 70$$

2. Count the dimes to add or subtract. Write a number sentence to match the dimes.



$$\underline{0 - 30 = 60}$$



$$\underline{60 + 40 = 100}$$

I can think of  $6 + 4 = 10$ , to help me.  
 6 dimes + 4 dimes equals 10 dimes.  
 $60 + 40 = 100$ . There is a total of  
 10 tens!