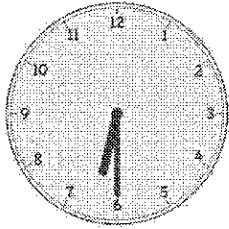



G1-M5-Lesson 13

1. Fill in the blanks.



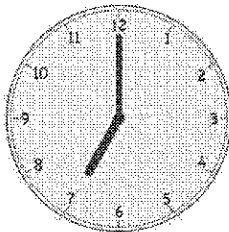
A



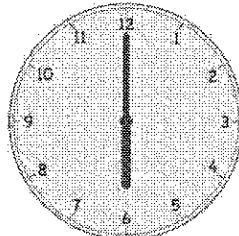
B

Clock B shows half past five.

Clock A shows half past 6. This one was easy because it's easy to read the digital clock. It shows "five-thirty."



A



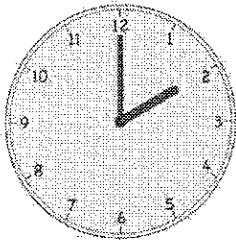
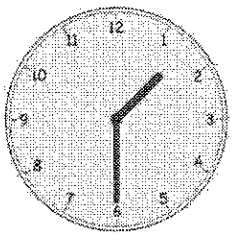
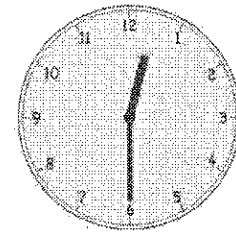

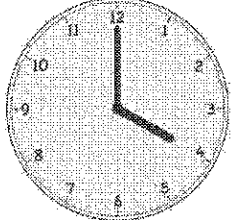

B

Clock A shows seven o'clock.

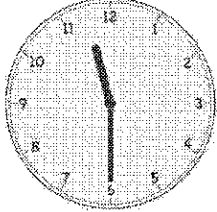
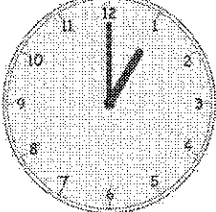
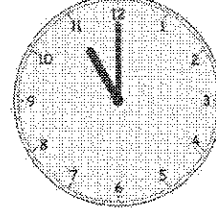

Both clocks show a time that is "o'clock," but when I look carefully at the hour hands, I see that clock B shows 6 o'clock, and clock A shows 7 o'clock.

2. Write the time on the line under the clock.

I also know that if the hour hand is halfway between two numbers, then it will be half past the hour.

<p>a.</p>  <p>_____</p> <p>2:00</p>	<p>b.</p>  <p>_____</p> <p>Half past 1</p>	<p>c.</p>  <p>_____</p> <p>12:30</p>
<p>d.</p>  <p>_____</p> <p>Half past 10</p>	<p>e.</p>  <p>_____</p> <p>4 o'clock</p>	<p>f.</p>  <p>_____</p> <p>Half past 5</p>

3. Put a check (✓) next to the clock(s) that show 11 o'clock.

<p>a.</p>  <input type="checkbox"/>	<p>b.</p>  <input type="checkbox"/>	<p>c.</p>  <input checked="" type="checkbox"/>	<p>d.</p>  <input checked="" type="checkbox"/>
--	--	--	---