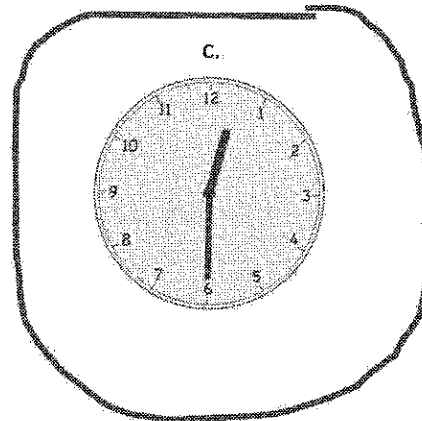
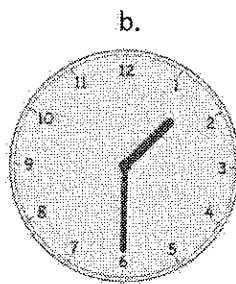
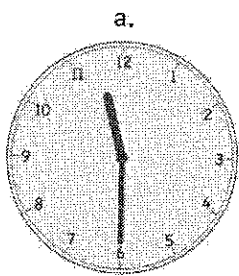


G1-M5-Lesson 11

1. Circle the correct clock.

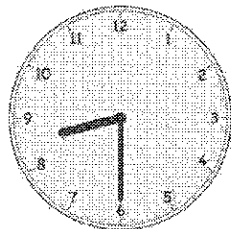
Half past 12 o'clock



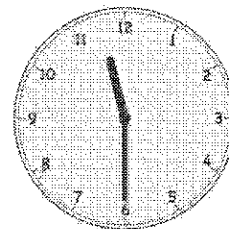
When the time is "half past", the minute hand will always be pointing down, halfway around the clock, at the 6. All these clocks have the minute hand pointing at the 6, so now I just find the clock with the hour hand pointing just past the 12.

The hour hand is not yet at the 1, so I know the hour is still 12.

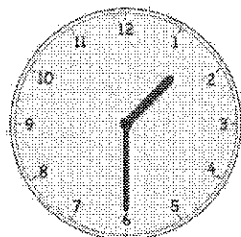
2. Write the time shown on each clock to tell about Henry's Saturday.



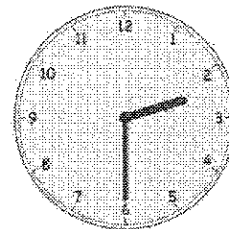
Henry wakes up at 8:30.



He goes to the park at 11:30.



He goes home for lunch at 1:30.



He takes a nap at 2:30.

I can check my work by asking myself if my answer makes sense. It wouldn't make sense for Henry to eat lunch at 8:30, for example.