












GK-M5-Lesson 11

Write the missing numbers. Then, count and draw X's and O's to complete the pattern.

										
10	11	12	13	14	15	16	17	18	19	20

To find the missing number, I use the pattern of 1 larger. It goes like this:

10. 1 more is 11.

11. 1 more is 12.

I draw 10 O's and 2 X's. Ten 2 is the same as 12.

I can think of my Hide Zero cards and Say Ten counting, too. I know 19 is 10 ones and 9 more ones. I can draw 10 O's and 9 X's.