







### GK-M5-Lesson 1

Circle 10. Count the number of times you circled 10 ones. Tell a friend or an adult how many times you circled 10 ones.

I count 5 gray moons and 5 white moons. 5 and 5 makes 10. I'll circle the 10 moons all at once.

Look! I can circle 10 ones 3 times: moons, dots, and hexagons.

I spot 10 dots right here. They are in 5-groups! I don't even have to count them.

I don't circle the suns because there are 9 of them. I am looking for groups of 10.