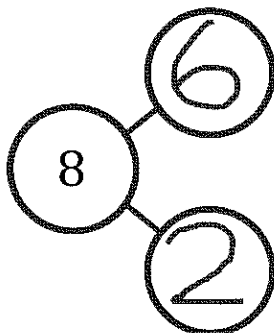
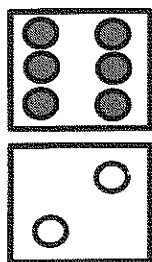


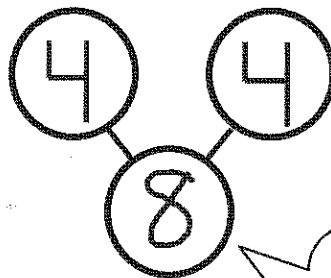
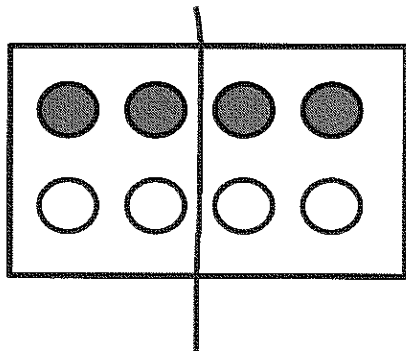
GK-M4-Lesson 9

Complete the number bond to match the domino.



Let me tell you how my number bond and domino match.
8 tells how many dots in all.
6 is the number of grey dots.
2 is the number of white dots.

Draw a line to make 2 groups of dots. Fill in the number bond.



I think I'll draw my line right here.
Where did you draw your line?

This number bond tells me two things at once:
8 is the same as 4 and 4.
4 and 4 make 8.
It matches my dot picture!