


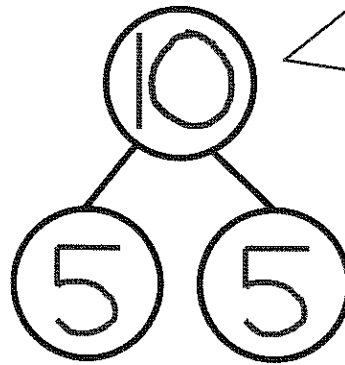
GK-M4-Lesson 41

Complete a number bond and a number sentence for the problem:

Color some blocks orange and the rest yellow to make 10. All of the yellow blocks fell off the table. How many blocks are left?




$$10 - 5 = 5$$

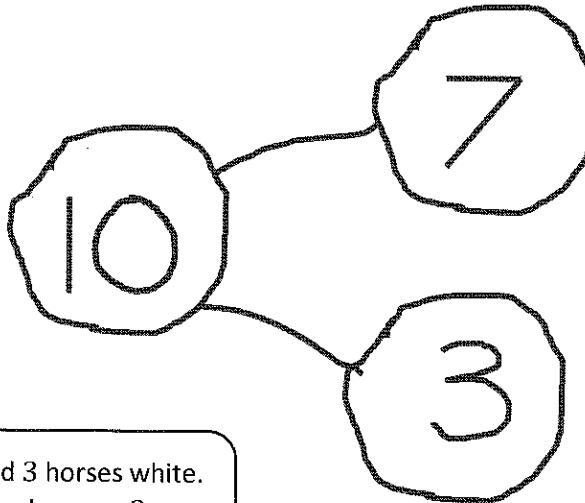


My parts of 10 are 5 and 5. If 5 yellow blocks fell off the table, then 10 take away 5 equals 5. There are 5 blocks left!

There were 10 horses in the yard. Some were brown, and some were white. Draw the horses the 5-group way. The brown ones went back into the barn. How many horses were still in the yard? Draw a number bond, and write a subtraction sentence.



$$10 - 7 = 3$$



I made 7 horses brown and 3 horses white. 7 brown horses went to the barn, so 3 white horses were still in the yard!