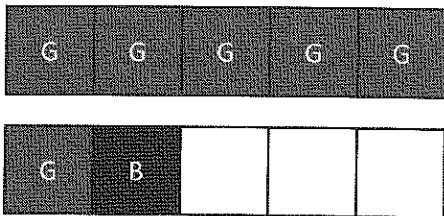



### GK-M4-Lesson 38

Follow the instructions to color the 5-group. Then, fill in the number sentence and number bond to match.

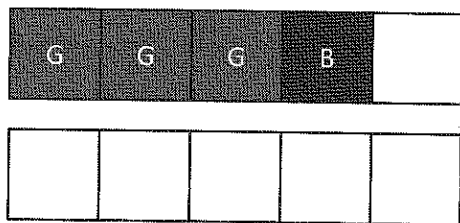
Color 6 squares green and 1 square blue.



$$\underline{6} + \underline{1} = \underline{7}$$



Color 3 squares green and 1 square blue.



$$\underline{3} + \underline{1} = \underline{4}$$

Adding 1 is easy!  
3. 1 more is 4.

