



## GK-M4-Lesson 37

Listen to each story. Show the story with your fingers on the number path. Then, fill in the number sentence and number bond.




Joey had 7 pennies. He found 2 pennies in the couch. How many pennies does Joey have now?



$$\underline{7} + \underline{2} = \underline{9}$$

I use the number path to help me solve the problem! I put my finger on 7 because Joey had 7 pennies. He found 2 pennies, so I hop forward 2 on the number path. My fingers stop on the 9. Joey has 9 pennies!

Joey gave the 2 pennies to his dad. How many pennies does Joey have now?



$$\underline{9} - \underline{2} = \underline{7}$$

I know that Joey has 9 pennies. He gave his dad 2 pennies, so I hop 2 backward on the number path. My fingers stop on the 7. Now, Joey has 7 pennies!