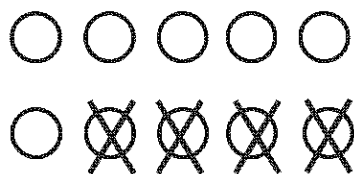
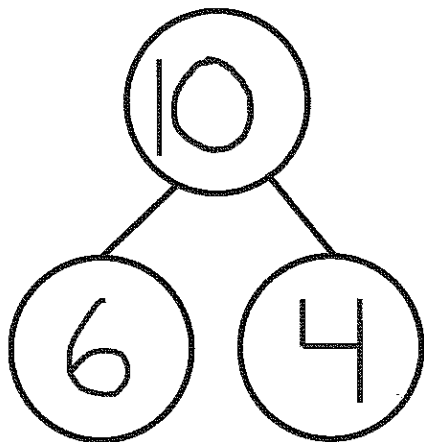


GK-M4-Lesson 36

Fill in the number bond and number sentence. Cross off the part that goes away.

MacKenzie had 10 buttons on her jacket. 4 buttons broke off her jacket. How many buttons are left on her jacket?



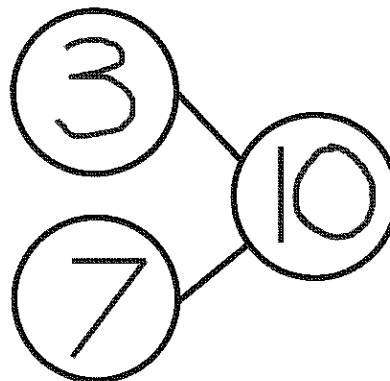
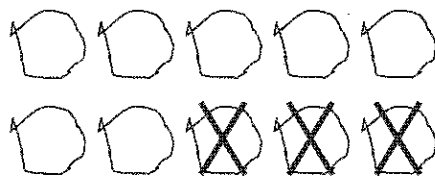
I know there were 10 buttons on the jacket. 4 broke and fell off. There are 6 buttons left on the jacket. I already knew that 4 and 6 make 10. So, 10 take away 4 is 6.

$$10 - 4 = 6$$

Make a 5-group drawing to show the story. Fill in the number bond and number sentence. Cross off the part that goes away.

Bob had 10 toy cars. 3 cars drove away. How many cars are left?

I made a 5-group drawing to show the cars. 3 drove away, so I crossed out 3. There are 7 cars left.



$$10 - 3 = 7$$