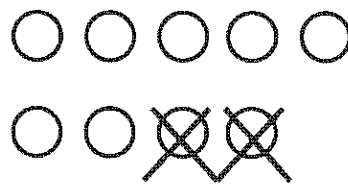



GK-M4-Lesson 35

Cross off the part that goes away. Fill in the number bond and number sentence.

Mary had 9 library books. She returned 2 books to the library. How many books are left?

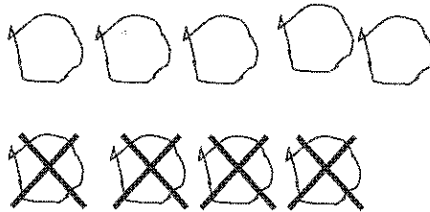



I solved it! If Mary had 9 library books, and she returns 2, then she has 7 books left.

$$\underline{9} - \underline{2} = \underline{7}$$

Make a 5-group drawing to show the story. Cross off the part that goes away. Fill in the number bond and number sentence.

Ryder had 9 pencils. 4 of them broke. How many pencils are left?



I draw 9 circles the 5-group way. Then, I cross off 4, and I have 5 left! That means 4 and 5 are parts of 9.

$$\underline{9} - \underline{4} = \underline{5}$$