

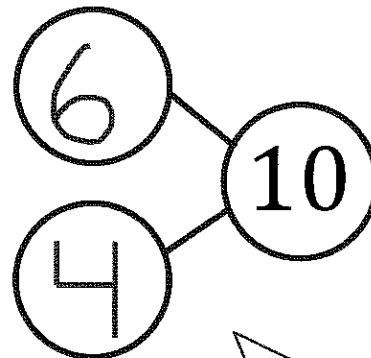


GK-M4-Lesson 34

There were 10 penguins. 4 penguins went back to the ship. Cross out 4 penguins. Fill in the number sentence and the number bond.



$$10 - 4 = \underline{6}$$

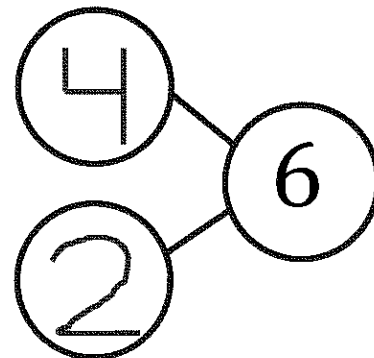
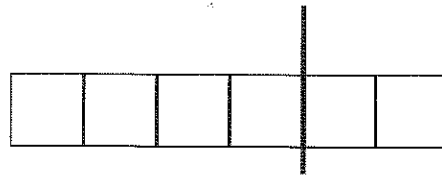


There are 10 penguins. I crossed out 4, and there are 6 left. So, 10 take away 4 equals 6.

I know that 4 penguins are on the ship, and 6 penguins are not on the ship. 4 and 6 are my parts of 10.

The squares below represent cubes. Count the cubes. Draw a line to break 4 cubes off the train. Fill in the number sentence and the number bond.

I drew my line to break apart my cube train into parts of 4 and 2. I have 6 cubes. I break off 4 cubes, and I have 2 cubes left!



$$\underline{6} - \underline{4} = \underline{2}$$