



GK-M4-Lesson 33

Fill in the number sentence to match the story.

There were 10 teddy bears. Cross out 3 bears. There are 7 bears left.




$$10 - \underline{3} = \underline{7}$$



I know there are 10 teddy bears, and I crossed out 3 bears. So, my number sentence is 10 take away 3 equals 7.

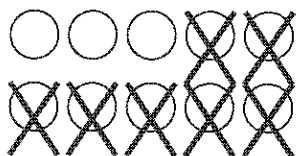
I crossed out 3 bears, and there were 7 left. So, 3 and 7 are my parts, and 10 is the whole.

Draw a line from the picture to the number sentence it matches.



$$10 - 7 = 3$$

I know how to match number sentences to pictures! First, I count the objects. Then, I count how many are crossed out. Finally, I count how many are left.



$$9 - 3 = 6$$