


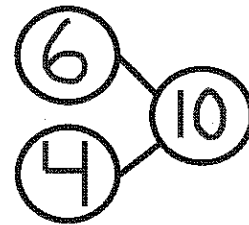
GK-M4-Lesson 30

Ming saw 10 animals at the pet store. She saw 6 fish and 4 turtles. Draw the animals in the 5-group way.

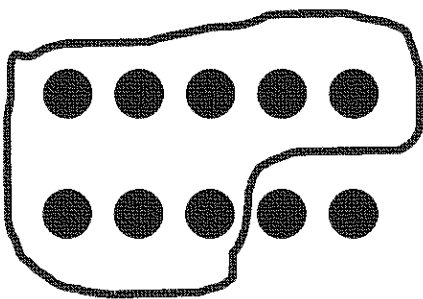


6 is 5 and 1, so I draw 5 dots on the top and 1 on the bottom.
To draw the other part, 4, I just filled in the rest of the 5-group. That's easy. It makes 10.

$$\boxed{6} + \boxed{4} = \boxed{10}$$



Make 2 groups. Circle 1 of the groups. Write a number sentence to match. Find as many partners of 10 as you can.



I can use my imagination to make 2 groups. I pretend the dots are crayons. 8 are in the box, and 2 are on the table.

$$10 = \boxed{8} + \boxed{2}$$

Listen to me say the number sentence. 10 equals 8 plus 2. Or, 10 is the same as 8 and 2. Both ways are right!