

GK-M4-Lesson 26

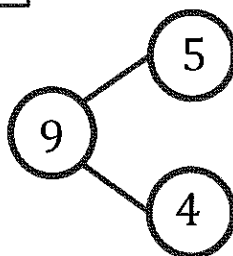
The squares below represent cube sticks.

Do the linking cube sticks match the number bond? Circle yes or no.



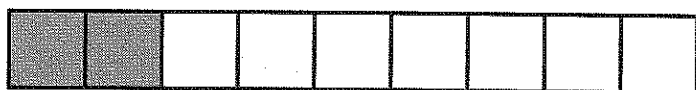
Yes

No

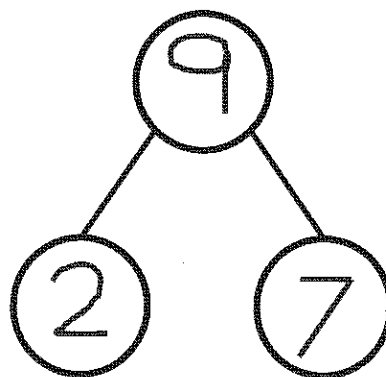


I count 9 cubes in all. So, the total, or whole, is right, but the parts are not. There are 3 gray cubes and 6 white cubes, not 5 and 4. That's not a match.

Make the number bond match the cube stick.



Let's see. There are 9 cubes in the whole stick. Part of the cube stick is gray, and the other part is white. I count each part. The parts are 2 and 7.



I can read the number bond. 9 is the same as 2 and 7. I can also say 9 is the same as 7 and 2. Either way, my number bond matches the cube stick.