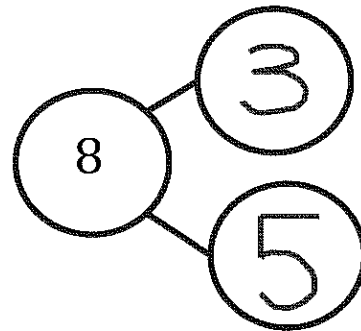
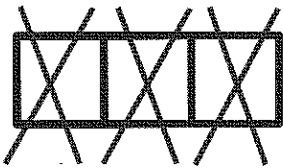



GK-M4-Lesson 24

Here is 8 the 5-group way. Put an X on 3 cubes. How many are left?

Fill in the number sentence and number bond.



$$8 - \boxed{3} = \boxed{5}$$

My number bond shows how I broke apart 8. 3 cubes are crossed out. 5 cubes are not crossed out. 8 is the total, or whole. It's like 3 and 5 are hiding inside of 8.

I did it! My picture, my number bond, and my number sentence all match. I could have crossed out 3 cubes a different way, and it would still match.