

G2-M8-Lesson 15

1. Decide whether the activity below would happen in the a.m. or the p.m. Circle your answer.

Waking up for school

Eating dinner

Reading a bedtime story


Making breakfast

a.m./ p.m.  
 a.m./ p.m.  
 a.m./ p.m.  
 a.m./ p.m.

A comes before P in the alphabet. That's how I remember that a.m. is morning and p.m. is afternoon. The morning comes before the afternoon!

2. What time does the clock show?

3 : 55




Even though it looks like the hour hand is pointing to the 4, I know it's not 4 o'clock yet because the minute hand shows 55 minutes! I have to wait 5 more minutes!

3. Draw the hands on the analog clock to match the time on the digital clock. Then, circle a.m. or p.m. based on the description given.

7:10

a.m. or p.m.

I know it's a.m. because it says "after you wake up," and that happens in the morning!




The digital time shows the digits of the hour and the minutes. On the analog clock, the little hand points to the 7 to show the hour. For the minute hand, I can count by 5's to figure out how to show 10 minutes after the hour. 5, 10...so the big hand points to the 2 to show 10 minutes.

4. Write what you might be doing if it were a.m. or p.m.

a.m.           eating breakfast          

p.m.           reading a book          



Usually at 7 in the morning, I am eating breakfast. 7 p.m. is 1 hour before bed, and that's the time I read!