


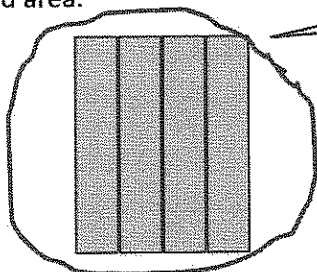
G2-M8-Lesson 11

1. For part (a), identify the shaded area.

a.

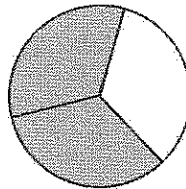


1 half



4 fourths

4 fourths make 1 whole!




2 thirds

b. Circle the shape above that has a shaded area that shows 1 whole.

2. What fraction do you need to color so that 1 whole is shaded?

a.



1 third plus 2 thirds makes 3 thirds. 3 thirds is the same as 1 whole!

2 thirds

b.




2 fourths

3. Complete the drawing to show 1 whole.

This is 1 third.

Draw 1 whole.



1 third and 1 third and 1 third make a whole; 3 thirds make a whole. I only have 1 third, so I need to draw 2 more!