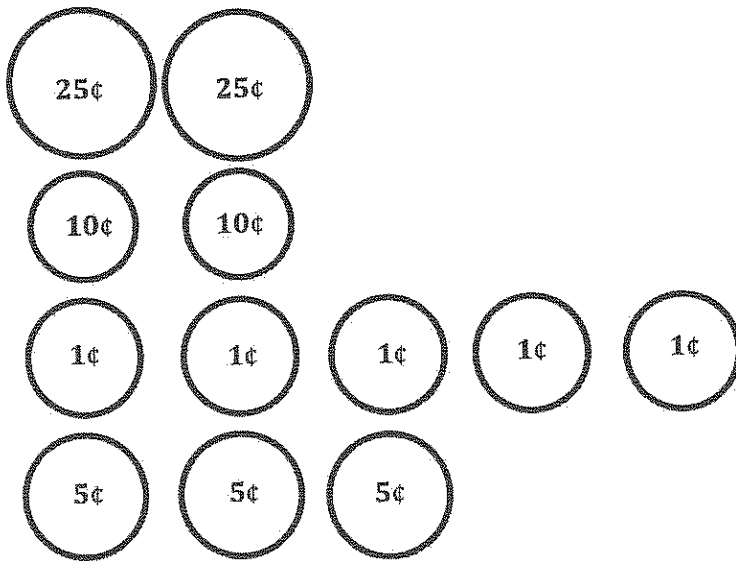


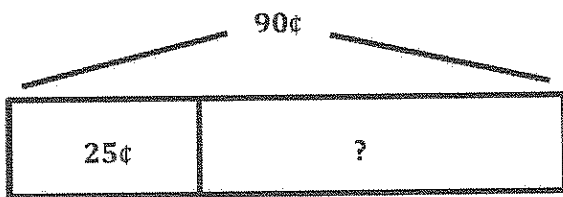
G2-M7-Lesson 7

Solve.

Enrique had 2 quarters, 2 dimes, 5 pennies, and 3 nickels in his wallet. Then, he bought a lemonade for 25 cents. How much money did he have left?



$$70\text{¢} + 20\text{¢} = 90\text{¢}$$

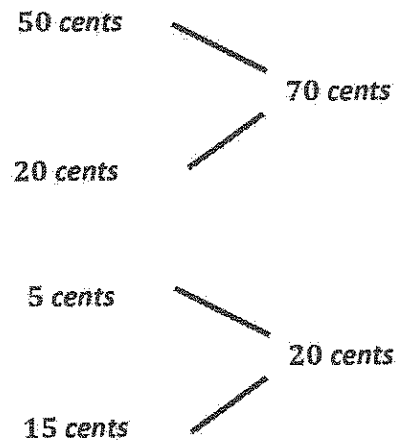


$$90 \xrightarrow{-20} 70 \xrightarrow{-5} 65$$

$$90\text{¢} - 25\text{¢} = ?$$

$$90\text{¢} - 25\text{¢} = 65\text{¢}$$

Enrique had 65 cents left.



First, I draw the coins in Enrique's wallet. Then I add them up and find that he has 90 cents.

I draw a tape diagram to show the parts and the whole. The whole is 90 cents. One part is 25 cents for the lemonade. The part Enrique has left is my unknown. I can solve using the arrow way.